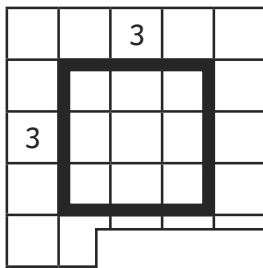


How Many Square Units

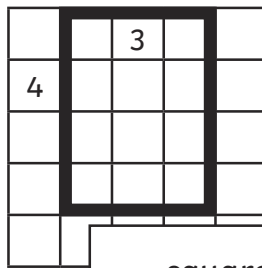
Find the area of each shape.

1.



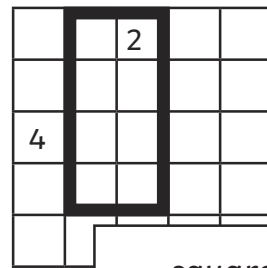
___ square units.

2.



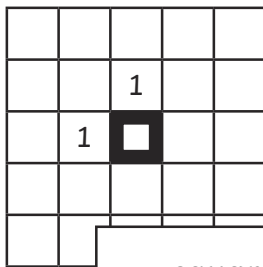
___ square units.

3.



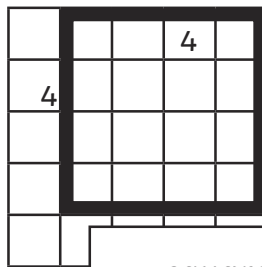
___ square units.

4.



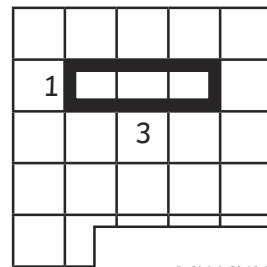
___ square units.

5.



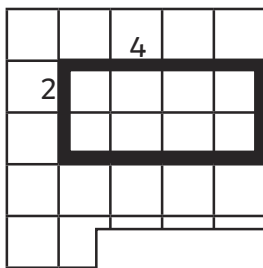
___ square units.

6.



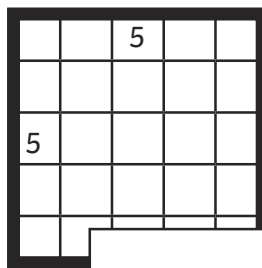
___ square units.

7.



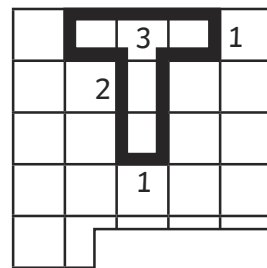
___ square units.

8.



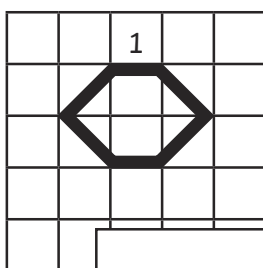
___ square units.

9.



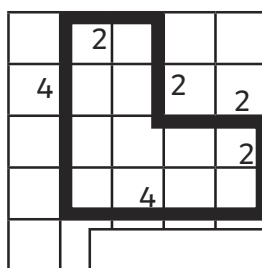
___ square units.

10.



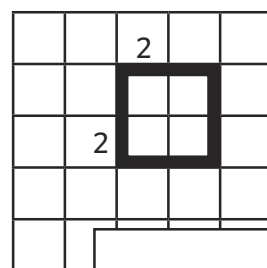
___ square units.

11.



___ square units.

12.



___ square units.

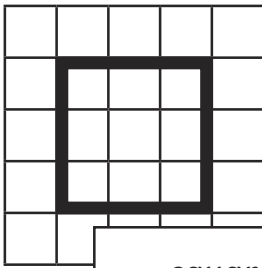
How Many Square Units **Answers**

1. 9 square units
2. 12 square units
3. 8 square units
4. 1 square units
5. 16 square units
6. 3 square units
7. 8 square units
8. 25 square units
9. 5 square units
10. 4 square units
11. 12 square units
12. 4 square units

How Many Square Units

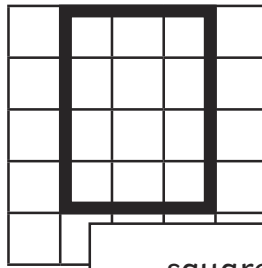
Find the area of each shape.

1.



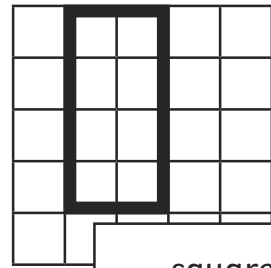
___ square units.

2.



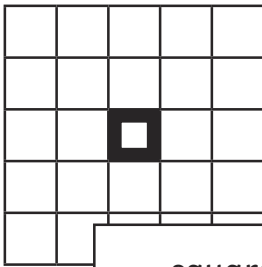
___ square units.

3.



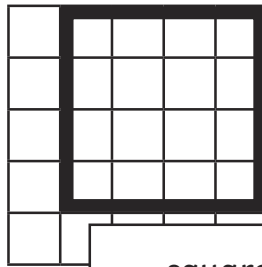
___ square units.

4.



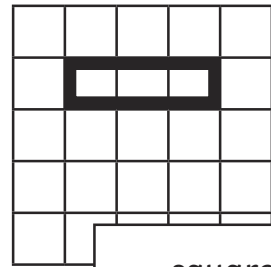
___ square units.

5.



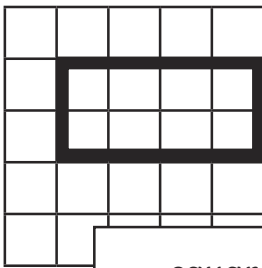
___ square units.

6.




___ square units.

7.



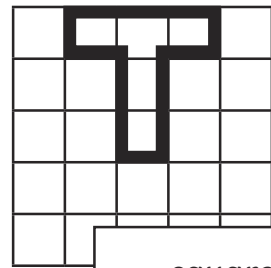
___ square units.

8.



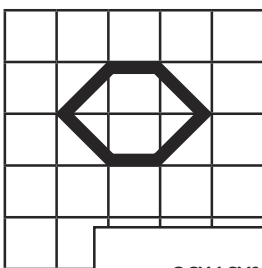
___ square units.

9.



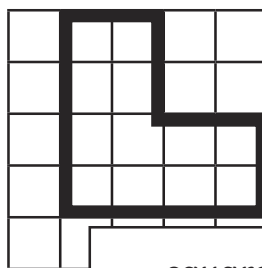
___ square units.

10.



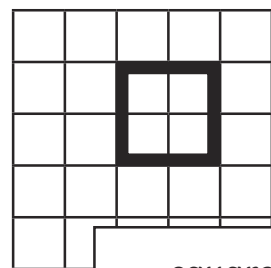
___ square units.

11.



___ square units.

12.



___ square units.

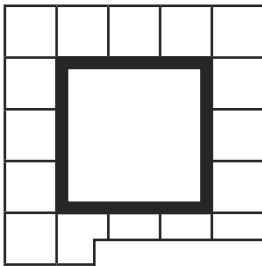
How Many Square Units **Answers**

1. 9 square units
2. 12 square units
3. 8 square units
4. 1 square units
5. 16 square units
6. 3 square units
7. 8 square units
8. 25 square units
9. 5 square units
10. 4 square units
11. 12 square units
12. 4 square units

How Many Square Units

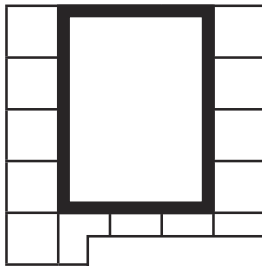
Find the area of each shape.

1.



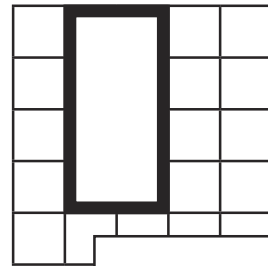
___ square units.

2.



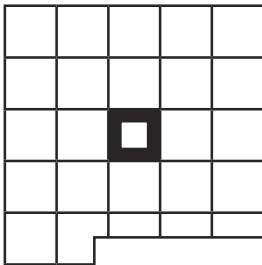
___ square units.

3.



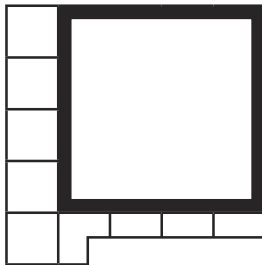
___ square units.

4.



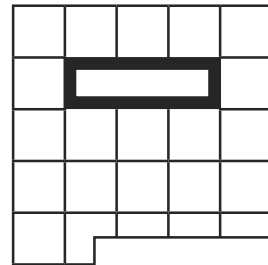
___ square units.

5.



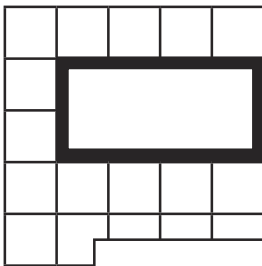
___ square units.

6.




___ square units.

7.



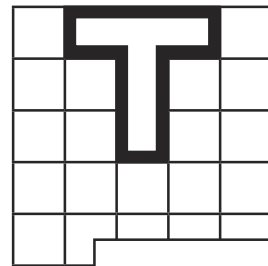
___ square units.

8.



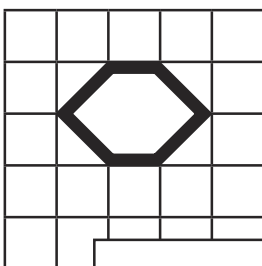
___ square units.

9.



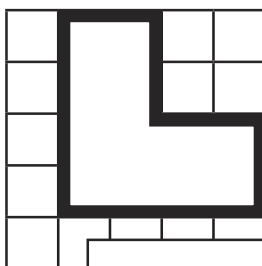
___ square units.

10.



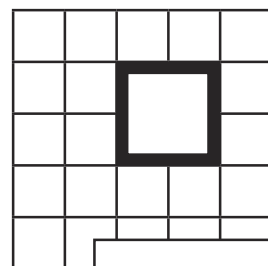
___ square units.

11.



___ square units.

12.



___ square units.

How Many Square Units **Answers**

1. 9 square units
2. 12 square units
3. 8 square units
4. 1 square units
5. 16 square units
6. 3 square units
7. 8 square units
8. 25 square units
9. 5 square units
10. 4 square units
11. 12 square units
12. 4 square units