

Making Equal Groups

Share these tasty treats between different numbers of people to make equal groups. Type your answers in the boxes and choose the correct symbol from the drop-down menu.


For example: Share between 3.



What does the calculation look like?

$$3 \div 3 = \textcircled{1}$$

a. Share between 2.



What does the calculation look like?

b. Share between 4.



What does the calculation look like?


c. Share between 3.



What does the calculation look like?


d. Share between 5.

What does the calculation look like?




e. Share between 2.

What does the calculation look like?



f. Share between 4.

What does the calculation look like?



You have 20 sweets. How many different ways can you put them into equal groups? Type in all the possible ways.