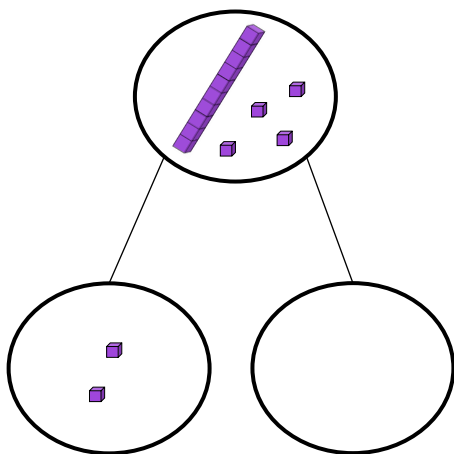
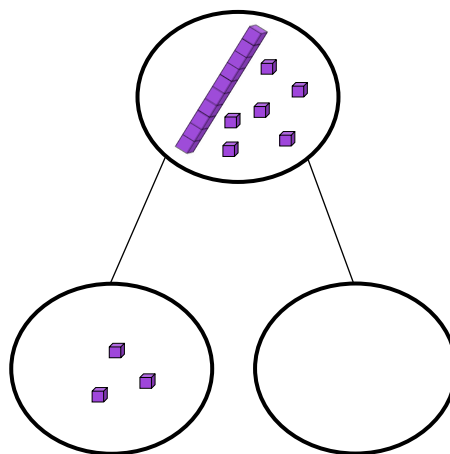


Complete:



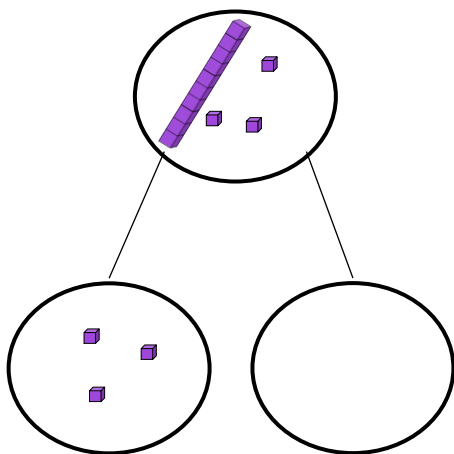
$$14 - 2 = \underline{\quad}$$

$$\underline{\quad} + 2 = 14$$



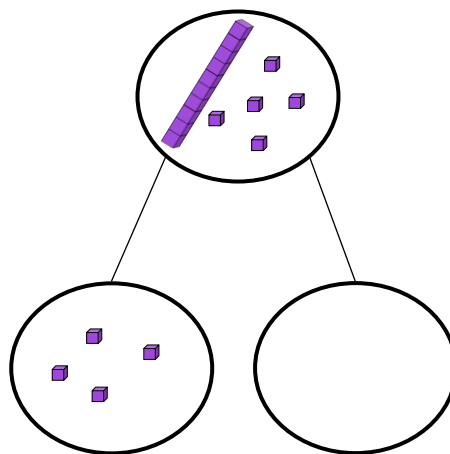
$$16 - 3 = \underline{\quad}$$

$$\underline{\quad} + 3 = 16$$



$$13 - 3 = \underline{\quad}$$

$$\underline{\quad} + 3 = 13$$



$$15 - 4 = \underline{\quad}$$

$$\underline{\quad} + 4 = 15$$